



SRI SARADA DEVI VIDYA KENDRA
SHIVANAHALLI
MATHEMATICS


Class: 2

Topic: Shapes Revision

Name:

topic 16

- 1) Tick the objects which are similar to rectangles. (ಅಯಾತ ಆಕಾರಕ್ಕೆ ಹೋಲುವ ವಸ್ತುಗಳನ್ನು ಟಿಕ್ ಮಾಡಿ)




- 2) Tick the objects which are similar to circle






SRI SARADA DEVI VIDYA KENDRA
SHIVANAHALLI

3) Tick the objects which are similar to triangle



4) Tick the objects which are similar to square






SRI SARADA DEVI VIDYA KENDRA
SHIVANAHALLI

5) Look at the shape. Draw the shape of the numbered side.



Side 1	Side 2	Side 3

6) How many in each shape?



How many  ? _____.

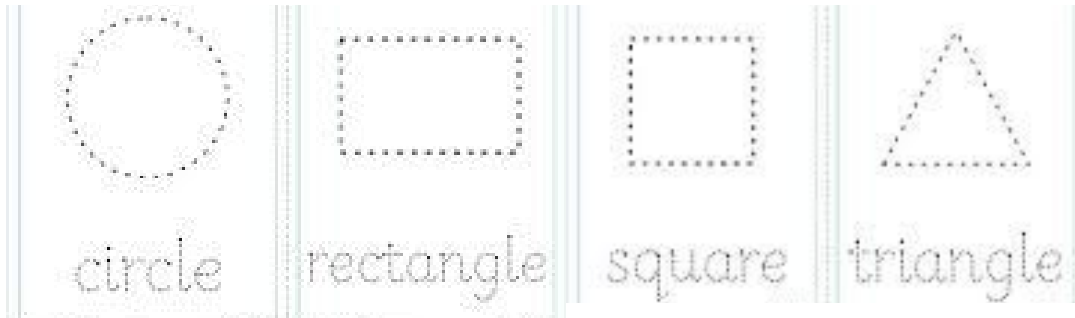
How many  ? _____.

How many  ? _____.

How many  ? _____.



7) Join the dots



8) Write shape names












SRI SARADA DEVI VIDYA KENDRA
SHIVANAHALLI

Look at the drawing . Colour it.



Draw any picture using shapes:ಆಕಾರಗಳನ್ನು ಬಳಸಿಕೊಂಡು ಯಾವುದೇ ಚಿತ್ರವನ್ನು ಬರೆಯಿರಿ