















1. ಕೆಳಗಿನ ಚಿತ್ರಗಳನ್ನು ನೋಡಿ ಕಳೆಯುವ ಲೆಕ್ಕಗಳನ್ನು ಮಾಡು

	$\begin{array}{r} 7 \\ - 2 \\ \hline \end{array}$
	$\begin{array}{r} 9 \\ - 3 \\ \hline \end{array}$
	$\begin{array}{r} 8 \\ - 5 \\ \hline \end{array}$
	$\begin{array}{r} 10 \\ - 4 \\ \hline \end{array}$

	$\begin{array}{r} 7 \\ - 4 \\ \hline \dots \end{array}$
	$\begin{array}{r} 7 \\ - 5 \\ \hline \dots \end{array}$
	$\begin{array}{r} 8 \\ - 3 \\ \hline \dots \end{array}$
	$\begin{array}{r} 8 \\ - 4 \\ \hline \dots \end{array}$
	$\begin{array}{r} 9 \\ - 1 \\ \hline \dots \end{array}$

2. ಕೊಟ್ಟಿರುವ ಲೆಕ್ಕವನ್ನು ನೋಡಿ ಲೆಕ್ಕಕ್ಕೆ ಗೆರೆಗಳನ್ನು ಎಳೆದು ಉತ್ತರವನ್ನು ಬರೆಯಿರಿ.

	$10 - 6 =$	_____
	$9 - 6 =$	_____
	$8 - 6 =$	_____
	$7 - 6 =$	_____
	$6 - 6 =$	_____

	$3 - 1 =$	2
	$6 - 2 =$	
	$4 - 1 =$	
	$5 - 2 =$	
	$7 - 1 =$	
	$9 - 4 =$	
	$8 - 2 =$	
	$6 - 3 =$	