



WORKSHEET

CLASS: 2

DATE:

DAY 1

# GROUPS of ten

9 tens = 90      4 ones = 4

3 ones =           8 tens =     

5 tens =           7 ones =     

9 ones =           7 tens =     

4 tens =           5 ones =     

8 ones =           2 tens =     


6 ones =           1 ten =



DAY 2

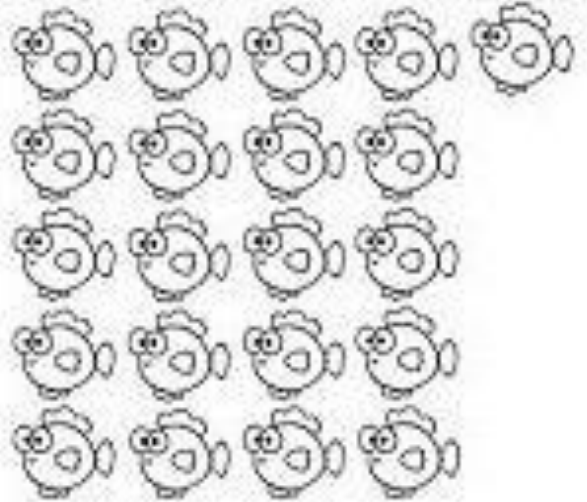
DATE:

Circle each group of ten to help you count.




2 tens 3 ones

23




\_\_\_ tens \_\_\_ ones

\_\_\_



\_\_\_ tens \_\_\_ ones

\_\_\_



\_\_\_ tens \_\_\_ ones

\_\_\_



DAY 3

DATE:




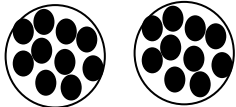

Try this:



= ten



= one

22	
_____	
36	_____
50	 _____
_____	
18	



DAY 4

DATE:

In each box there are 10 crayons



How many boxes of  
crayons are there?

\_\_\_\_\_

How many crayons are  
outside the box?

\_\_\_\_\_

Total crayons = \_\_\_\_\_



DAY 5

DATE:

1.



Number of groups = \_\_\_\_\_

Number of glasses = \_\_\_\_\_

2.



Number of groups = \_\_\_\_\_

Number of bangles = \_\_\_\_\_

3.



Number of groups = \_\_\_\_\_

Number of earrings = \_\_\_\_\_