



SRI SARADA DEVI VIDYA KENDRA
SHIVANAHALLI

MATHEMATICS

Class: 2

Topic: Place value and greater and smaller number

DAY 1

DATE:

Write the numbers in words

T- tens O- ones

T	O	Number Values
5	3	5 tens, 3 ones
7	6	
3	2	
4	5	
9	3	
0	5	



SRI SARADA DEVI VIDYA KENDRA
SHIVANAHALLI

DAY 2

DATE:

1) Write down which digit is in the **ones** place:

167 → 7	425 →	319 →	830 →
56 →	902 →	621 →	83 →

2) Write down which digit is in the **tens** place:

273 →	194 →	832 →	508 →
42 →	315 →	209 →	93 →



DAY 3

DATE:

MORE and Less. Let us guess

Circle the correct answer.

Y Number of teeth in your mouth



More than 40

Less than 40

Y Number of seeds in an orange



More than 50

Less than 50

Y Number of matchsticks
in a matchbox



More than 30

Less than 30

Y Number of spokes in
one cycle wheel



More than 20

Less than 20



SRI SARADA DEVI VIDYA KENDRA
SHIVANAHALLI

Circle the **biggest** number.

13

3

9

12

15

20

10

5

12

11

12

13

19

18

17

13

16

14

Circle the **smallest** number.

7

2

4

14

16

12

15

7

20

19

8

9

1

10

20

16

15

14



SRI SARADA DEVI VIDYA KENDRA
SHIVANAHALLI

DAY 4

DATE:

Draw 1 MORE ball



LESS

MORE

Draw 1 LESS caps



MORE

LESS



SRI SARADA DEVI VIDYA KENDRA
SHIVANAHALLI

Draw 1 MORE birds.



MORE

LESS

Draw 1 MORE leaves.



MORE

LESS



SRI SARADA DEVI VIDYA KENDRA
SHIVANAHALLI


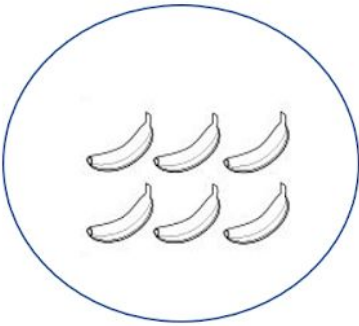
Draw 1 LESS mugs.



MORE

LESS

Draw 1 MORE bananas



LESS


MORE



DAY 5

DATE:

Colour the numbers that are more than 20 green. Colour the numbers that are less than 20 brown.



KEY WORDS

MORE	LESS
BIG	SMALL
GREATER	SMALLER
GREATER THAN	SMALLER THAN



**SRI SARADA DEVI VIDYA KENDRA
SHIVANAHALLI**



**SRI SARADA DEVI VIDYA KENDRA
SHIVANAHALLI**