



WORKSHEET

CLASS : 3

DAY 1

DATE:

## GROUPS of ten

$$9 \text{ tens} = \underline{90} \quad 4 \text{ ones} = \underline{4}$$

$$3 \text{ ones} = \underline{\quad} \quad 8 \text{ tens} = \underline{\quad}$$

$$5 \text{ tens} = \underline{\quad} \quad 7 \text{ ones} = \underline{\quad}$$

$$9 \text{ ones} = \underline{\quad} \quad 7 \text{ tens} = \underline{\quad}$$

$$4 \text{ tens} = \underline{\quad} \quad 5 \text{ ones} = \underline{\quad}$$

$$8 \text{ ones} = \underline{\quad} \quad 2 \text{ tens} = \underline{\quad}$$


$$6 \text{ ones} = \underline{\quad} \quad 1 \text{ ten} = \underline{\quad}$$



DAY 2

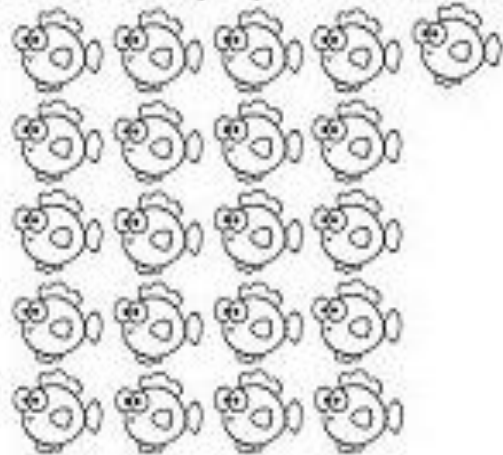
DATE:

Circle each group of ten to help you count.




2 tens 3 ones

23




\_\_\_ tens \_\_\_ ones

\_\_\_\_\_



\_\_\_ tens \_\_\_ ones







\_\_\_\_\_



\_\_\_ tens \_\_\_ ones

\_\_\_\_\_




<div></div> <div><div>ten-groups</div><div>ones</div><div>a. <input type="text"/></div><div><input type="text"/></div></div>	<div></div> <div><div>ten-groups</div><div>ones</div><div>b. <input type="text"/></div><div><input type="text"/></div></div>	<div></div> <div><div>ten-groups</div><div>ones</div><div>c. <input type="text"/></div><div><input type="text"/></div></div>
<div></div> <div><div>ten-groups</div><div>ones</div><div>d. <input type="text"/></div><div><input type="text"/></div></div>	<div></div> <div><div>ten-groups</div><div>ones</div><div>e. <input type="text"/></div><div><input type="text"/></div></div>	<div></div> <div><div>ten-groups</div><div>ones</div><div>f. <input type="text"/></div><div><input type="text"/></div></div>



DAY 3

Activity

Draw/Paste sticks as bundle of tens

29	
13	
41	



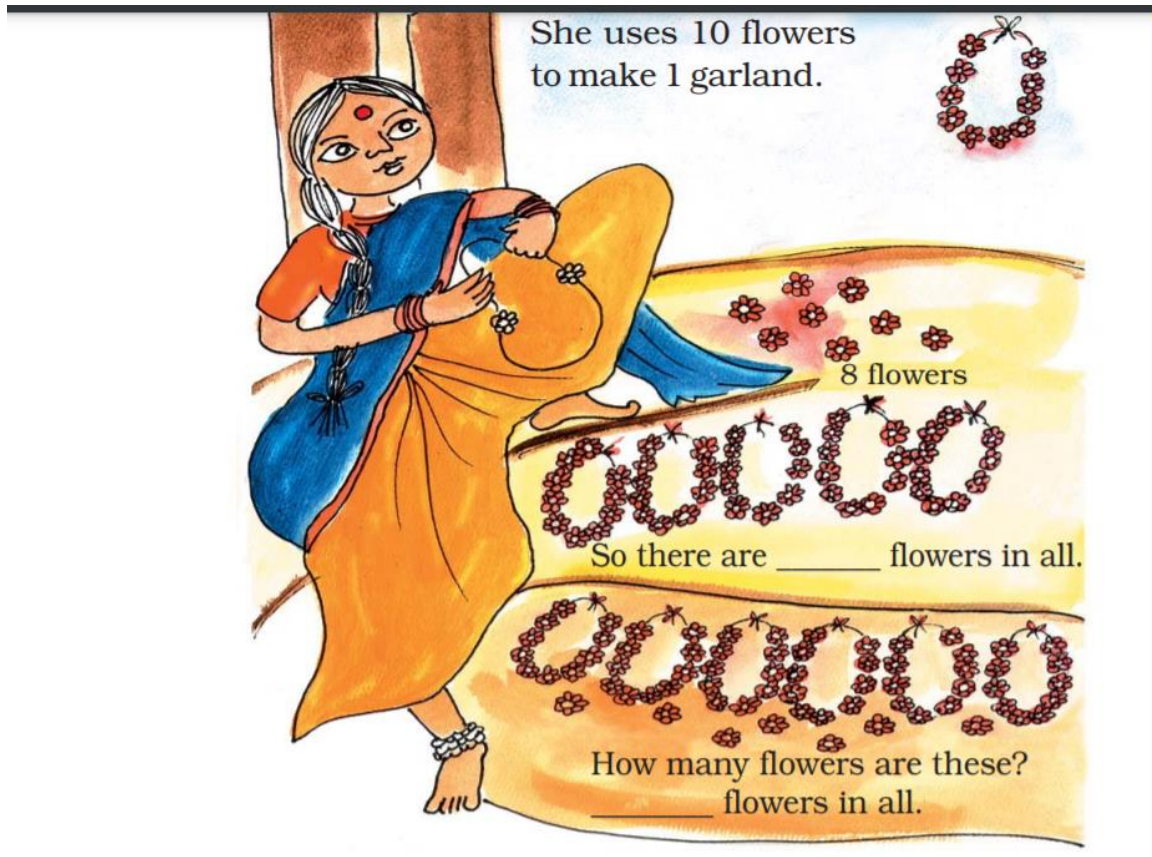
SRI SARADA DEVI VIDYA KENDRA SHIVANAHALLI

20	
36	
12	



DAY 4

DATE:




With 21 flowers how many garland can u make? Draw below






DAY 5

DATE:



**Counting in 10's**

10	110	310	_____
20	_____	_____	720
30	_____	_____	_____
_____	_____	_____	_____
_____	_____	_____	_____
_____	_____	_____	_____
_____	_____	_____	_____
_____	_____	_____	780
_____	190	_____	_____
100	200	400	_____



Easy! Just skip in tens.

Finish