



Name: _____

Subject: Mathematics

Class: 4th

Date: 11/11/2020

Day-1

1] Observe the pictures and answer the following.



1) Which shape does the above pictures represent?

_____.


2) List any 10 objects/things which are circle in shape?

- | | |
|----|-----|
| 1. | 6. |
| 2. | 7. |
| 3. | 8. |
| 4. | 9. |
| 5. | 10. |

Day 2:

3) Draw a picture using circles.

Example:




Day-3

A

Draw two circles without using any tools

1.



2.

3.

B

Trace two circles using circular objects

1.




2.

3.

I. From above drawings A and B, which looks like a **correct circle**? _____

II. Look at the picture below, which will you use to draw a circle?



Day 4:

I] Watch the video (uploaded in ssvk.in school website) and draw five circles of different sizes using compass